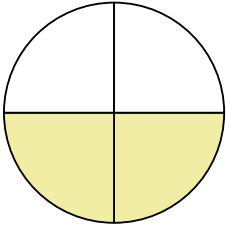


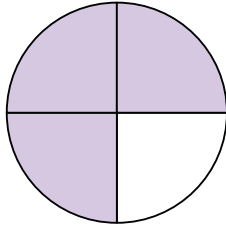
**Determine which letter best describes the shaded portion.****Answers**

1)



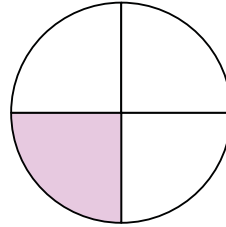
- A. Two Quarters
B. One Quarter
C. Three Quarters

2)



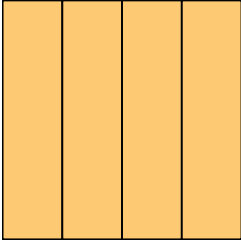
- A. One Quarter
B. Three Quarters
C. Two Quarters

3)




- A. One-Fourth
B. Two Quarters
C. Three Quarters

4)




- A. One Quarter
B. Four-Fourths
C. Two Quarters

5)




- A. Four Quarters
B. Two Quarters
C. One Quarter

6)




- A. Two Quarters
B. Two Halves
C. One Quarter

7)




- A. Three Quarters
B. One Quarter
C. One Half

8)



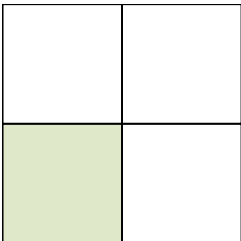
- A. Two Quarters
B. Three-Fourths
C. One Quarter

9)



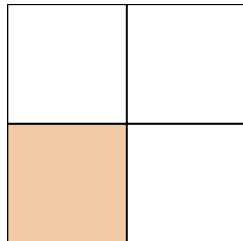
- A. Two Quarters
B. One Quarter
C. Three Quarters

10)




- A. Three Quarters
B. One Quarter
C. Two Quarters

11)



- A. One-Fourth
B. Three Quarters
C. Two Quarters

12)



- A. Four-Fourths
B. One Quarter
C. Two Quarters

1. _____

2. _____

3. _____

4. _____

5. _____

6. _____

7. _____

8. _____

9. _____

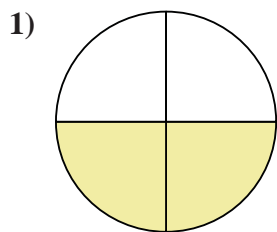
10. _____

11. _____

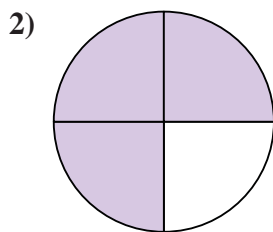
12. _____



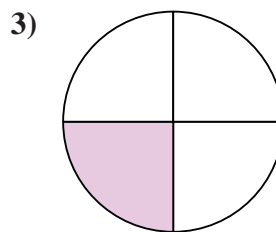
Determine which letter best describes the shaded portion.



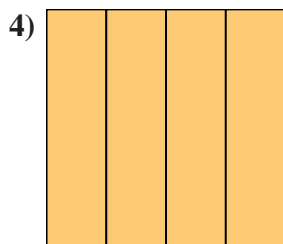
- A. Two Quarters
B. One Quarter
C. Three Quarters



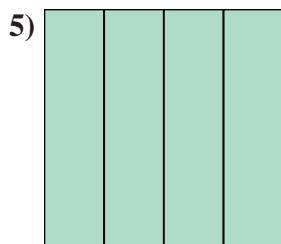
- A. One Quarter
B. Three Quarters
C. Two Quarters



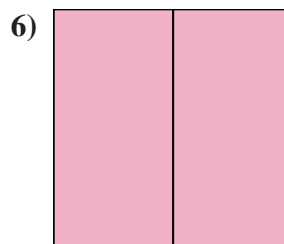
- A. One-Fourth
B. Two Quarters
C. Three Quarters



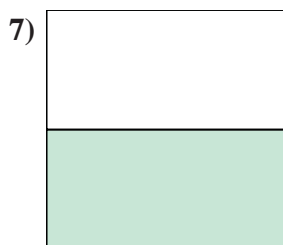
- A. One Quarter
B. Four-Fourths
C. Two Quarters



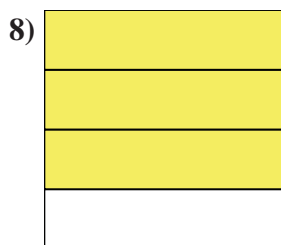
- A. Four Quarters
B. Two Quarters
C. One Quarter




- A. Two Quarters
B. Two Halves
C. One Quarter



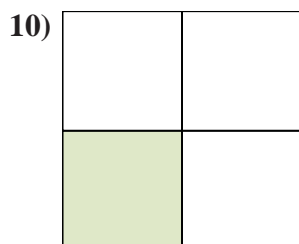
- A. Three Quarters
B. One Quarter
C. One Half



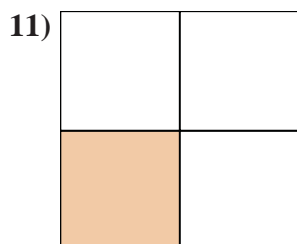
- A. Two Quarters
B. Three-Fourths
C. One Quarter



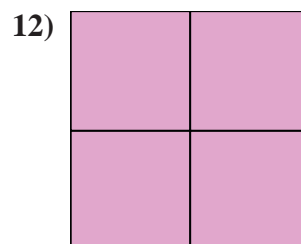
- A. Two Quarters
B. One Quarter
C. Three Quarters



- A. Three Quarters
B. One Quarter
C. Two Quarters



- A. One-Fourth
B. Three Quarters
C. Two Quarters



- A. Four-Fourths
B. One Quarter
C. Two Quarters

Answers

1. **A**
2. **B**
3. **A**
4. **B**
5. **A**
6. **B**
7. **C**
8. **B**
9. **B**
10. **B**
11. **A**
12. **A**