

Name: _____

Date: _____

Understanding equal groups of as multiplication


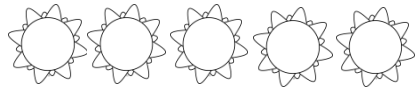


Directions: Fill in the blanks to make each of the statements below true.



3 groups of three= _____

3 threes= _____

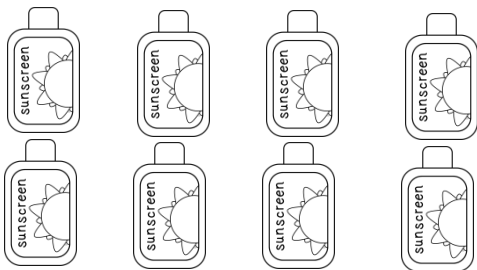
3 x 3= _____



4 groups of five= _____

4 fives= _____


4 x 5= _____



4 groups of two= _____

4 twos= _____

4 x 2= _____



6 groups of four= _____

6 fours= _____

6 x 4= _____