

Name _____

Time to the Hour

Skill 17

Learn the Math

A clock shows us the time.

Show 5:00 on the clock.

Step 1

Start with the minute hand and the hour hand pointing to 12.



Vocabulary

hour

hour hand

minute

minute hand

Step 2

Move the hour hand to the 5.



You can also show the time on a digital clock.



Both clocks show ____:____.

Do the Math

Skill 17

Use the clock to read each time.
Write the time.

1.



:

2.



:

3.



:

4.



:

5.



:


6.



:


Draw the clock hands.

7.




8:00

8.



10:00

9.



6:00

Check

10. Where is the minute hand if the time is 4 o'clock?
Where is the hour hand?
