

Name _____

Time to the Half Hour

Skill **5**




Learn the Math

Leo's guitar lesson begins at the time shown on the clock. At what time does Leo's guitar lesson begin?



Vocabulary

half hour
hour hand
minute hand

Step 1 Look at the hour hand.	 <p>hour hand</p>	The hour hand points between the 11 and the 12. This means the hour is 11.
Step 2 Look at the minute hand.	 <p>minute hand</p>	The minute hand points to the _____. This means it is 30 minutes after the hour.
Step 3 Write the time.	 <p>hour minutes</p>	The digital clock shows time to the _____ hour. It is _____.

So, the lesson begins at _____, or _____ minutes after _____ o'clock.

REASONING Why does the hour hand point halfway between the 11 and the 12 at 11:30?

Do the Math

Skill 5

1. The clock shows the time that Ali goes to art class. What time does Ali go to art class?



Remember

On the half hour, the minute hand points to the 6.

- Look at the hour hand.

The hour hand points between

the ____ and the ____.

This means the hour is ____.

- Look at the minute hand.

The minute hand points to the ____.

This means it is ____ minutes after the hour.

- Write the time the clock shows.



So, Ali goes to art class at ____.

Read the clock. Write the time.

2.



3.



4.



5.



6.



7.



8. The time is after 7 o'clock but before 8 o'clock. The minute hand points to the 6. Show the time on both clocks.

